




Date: _____


Score: _____

8 2-D Shapes (1)

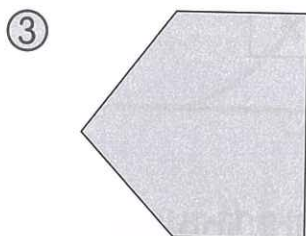
Write the names of the following shapes.



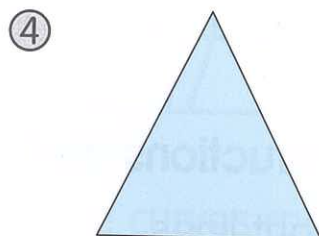
Quadrilateral



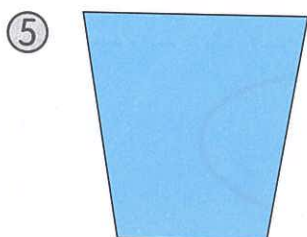
Hexagon




Pentagon



Triangle



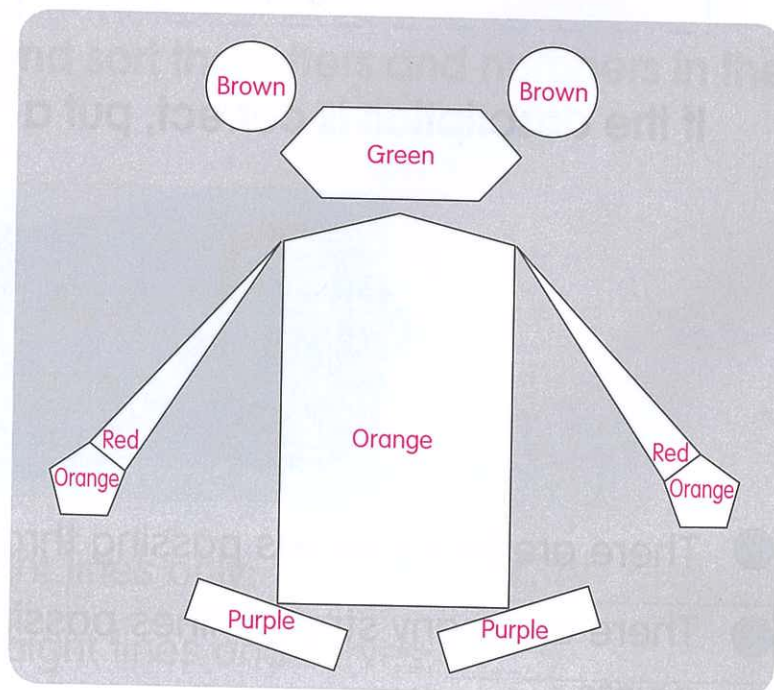
Quadrilateral



Circle


Follow the instructions and colour the shapes below.

- ⑦ Colour triangle(s) red.
- ⑧ Colour quadrilateral(s) purple.
- ⑨ Colour pentagon(s) orange.
- ⑩ Colour hexagon(s) green.
- ⑪ Colour circle(s) brown.



Count the numbers of sides and write the names of the following shapes.

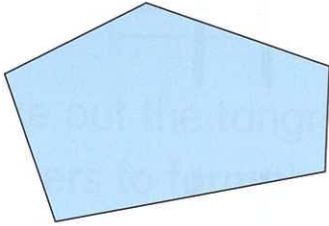
12



This shape has 6 sides.

It is a hexagon.


13



This shape has 5 sides.

It is a pentagon.

14




This shape has 4 sides.


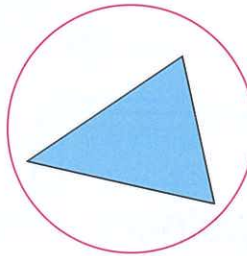
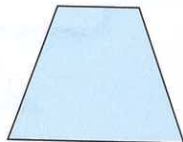
It is a quadrilateral.

Write the names of the 2-D shapes on the left. Then circle the same type of shapes on the right.

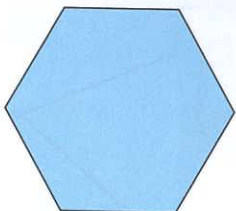
15



Triangle



16



Hexagon

