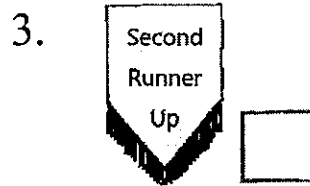

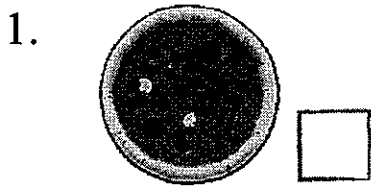


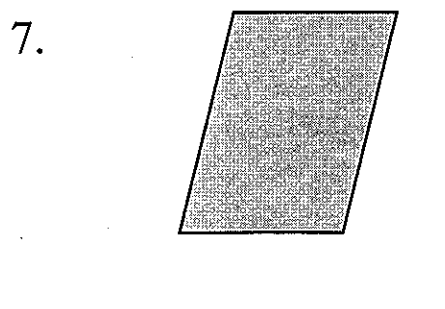

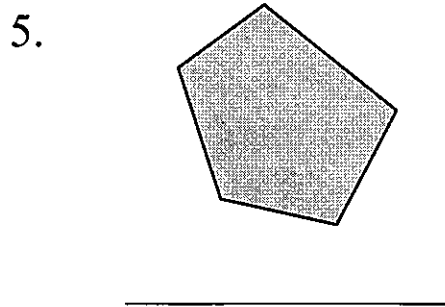
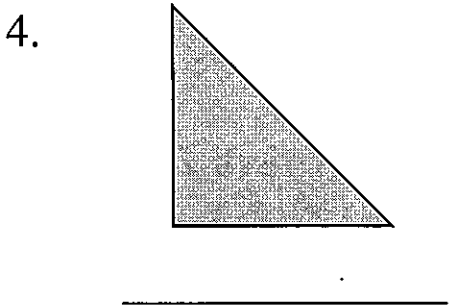
8 2-D Shapes (1)

Which 2-D shape does each object below look like? Write the letter for the answer in .

- | | |
|-------------|------------------|
| A. Triangle | B. Quadrilateral |
| C. Pentagon | D. Hexagon |
| | E. Circle |

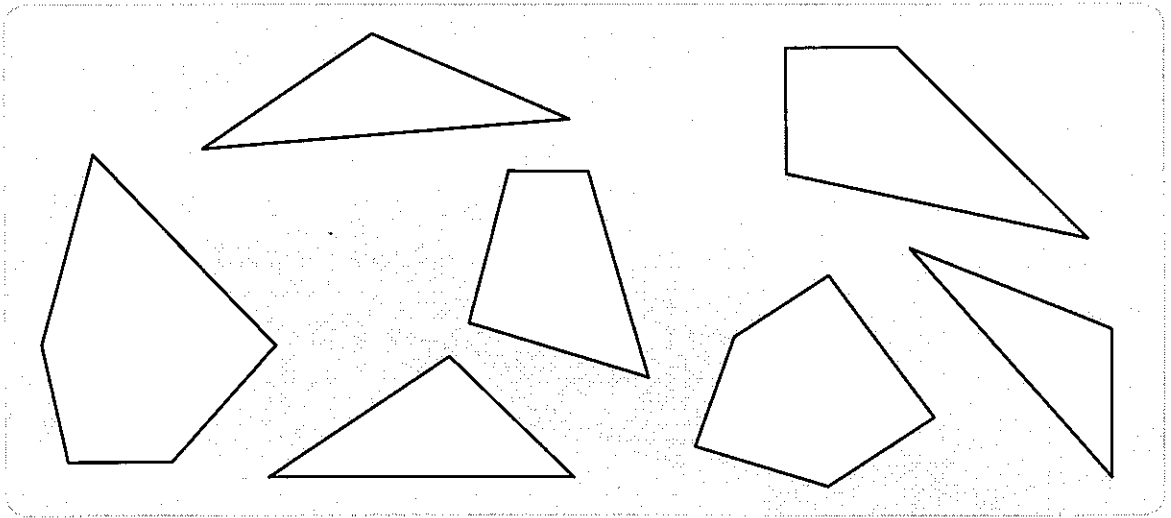


Write the names of the shapes.



Count the number of the shapes and fill in the blanks.

8.



In the picture, there are ____ triangles,

____ quadrilaterals and

_____.

(Name of the 2-D shape)

Follow the instructions to colour.

9. Colour circle(s) red.
10. Colour triangle(s) blue.
11. Colour quadrilateral(s) yellow.
12. Colour pentagon(s) green.
13. Colour hexagon(s) orange.

