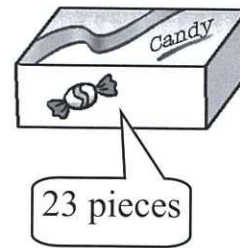
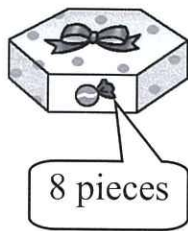


▲ Tasty candies




10. Mrs Lee buys a box of  and a box of . How many candies are there altogether?

$$\begin{array}{r} 8 + 45 \\ \hline = \boxed{53} \end{array}$$

There are 53 candies altogether.






$$\begin{array}{r} 8 \\ + 45 \\ \hline 53 \end{array}$$

11. Judy has a box of . Mum gives her 18 more. How many candies does Judy have altogether?

$$\begin{array}{r} 23 + 18 \\ \hline = \boxed{41} \end{array}$$

Judy has 41 candies altogether.

$$\begin{array}{r} 23 \\ + 18 \\ \hline 41 \end{array}$$

12. A box of  and a box of ( /  /  / ) have 20 candies altogether.

(Circle the answer)