

* Subtraction: compare, find the difference


11. Animal Farm (1)

Date: _____

Score: _____ / 6

1B11 - Subtraction within 18

Our class visited an animal farm and saw these animals there.





Suggest to finish the first question together in class first.



Fill in the blanks and circle the answers.

The sentence structure might be a bit tricky here. Please help students understand it: think of whether the former is more or fewer than the latter....



1.) There are (2) (**more** / fewer)  9 than  7 .

Then fill up the difference in the brackets.

2.) There are (5) (more / **fewer**)  2 than  7 .

3.) There are (5) (more / **fewer**)  4 than  9 .

4.) There are (3) (**more** / fewer)  7 than  4 .

5.) There are (7) (more / **fewer**)  2 than  9 .

6.) There are (2) (**more** / fewer)  4 than  2 .

* Subtraction: compare, find the difference


12. Animal Farm (2)

Date: _____













Score: _____ / 6

1B11 - Subtraction within 18

Our class visited an animal farm and saw these animals there.



Fill in the blanks and circle the answers.

- 1.) There are (4) (**more** / fewer)  11 than  7 .
- 2.) There are (7) (more / **fewer**)  4 than  11 .
- 3.) There are (5) (**more** / fewer)  13 than  8 .
- 4.) There are (4) (more / **fewer**)  4 than  8 .
- 5.) There are (3) (**more** / fewer)  7 than  4 .
- 6.) There are (6) (**more** / fewer)  13 than  7 .