









▲ Yummy bakery

The number in shows the quantity of food on the shelf.


 95 pieces Donut	 28 pieces Wheat bread	 6 pieces Birthday cake
 16 pieces Hamburger	 47 pieces Coconut cake	





Solve the following problems.

12. After selling 20 , the shopkeeper put the remaining  in a box. How many  are there in the box?

$$\begin{array}{r} 95 - 20 \\ \hline = 75 \end{array}$$

$$\begin{array}{r} 95 \\ - 20 \\ \hline 75 \end{array}$$


There are 75  in the box.

13. There are 47  and 6 . How many more  are there than ?

$$\boxed{47} - \boxed{6} = \boxed{41}$$

$$\begin{array}{r} 47 \\ - 6 \\ \hline 41 \end{array}$$

There are 41 more  than .

14. There are 47 . 20 of them are chocolate flavour, the rest are original flavour. How many pieces of original flavour are there?

$$\begin{array}{r} 47 - 20 \\ \hline = 27 \end{array}$$

$$\begin{array}{r} 47 \\ - 20 \\ \hline 27 \end{array}$$

There are 27 pieces of original flavour.