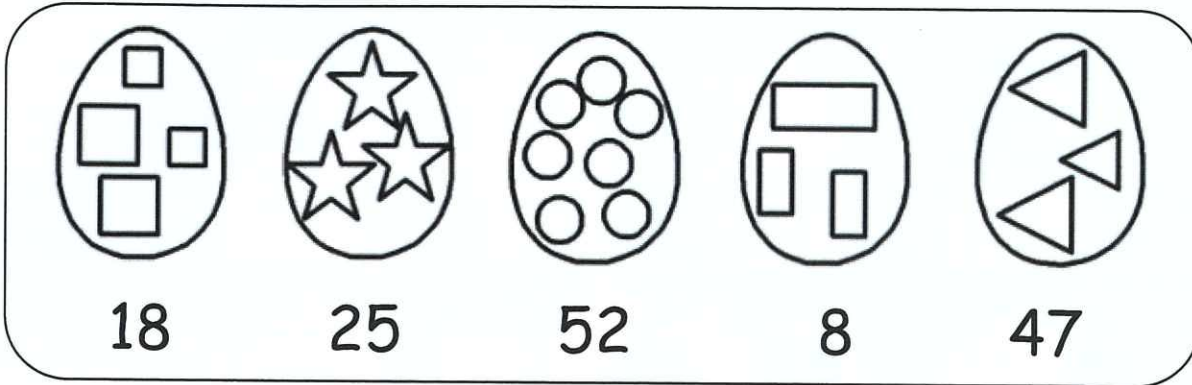



13. Easter Egg Hunt (1)

Date: _____
 Score: _____ / 6
 1D10 - Addition of 2d numbers

Mr Baker prepares some Easter eggs for an egg hunt competition.



* Suggest students to write all the numbers below the eggs first, then give the sum of each pair.



Fill in the blanks.



1.) He prepares (**33**)  and  altogether.

2.) He prepares (**50**)  and  altogether.

3.) He prepares (**70**)  and  altogether.

4.) He prepares (**72**)  and  altogether.

5.) He prepares (**99**)  and  altogether.

6.) He prepares (**43**)  and  altogether.

