

Exercise 8

Basic Worksheet /
Consolidating Worksheet /
Advanced Worksheet

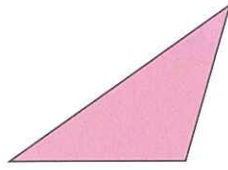
Write the names of the following shapes.

1




Quadrilateral

2



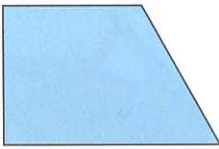
Triangle

3




Pentagon

4




Quadrilateral

5



Circle

6



Hexagon

Follow the instructions and colour the shapes below.

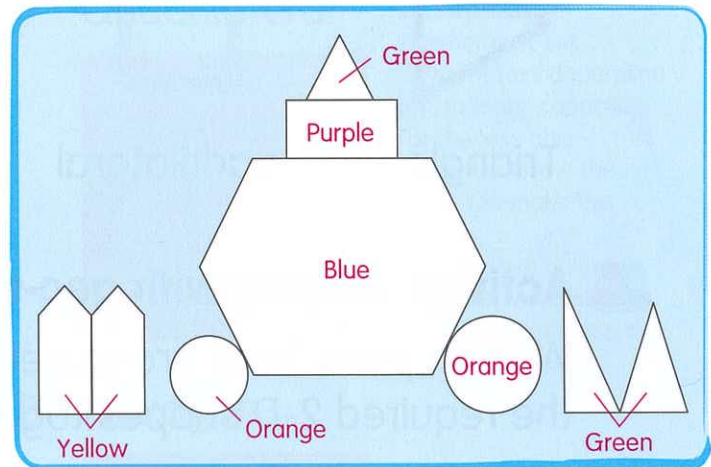
7 Colour triangle(s) 

8 Colour quadrilateral(s) 

9 Colour pentagon(s) 

10 Colour hexagon(s) 

11 Colour circle(s) 



Circle the answer.

12 Which of the following 2-D shapes is not a pentagon?

