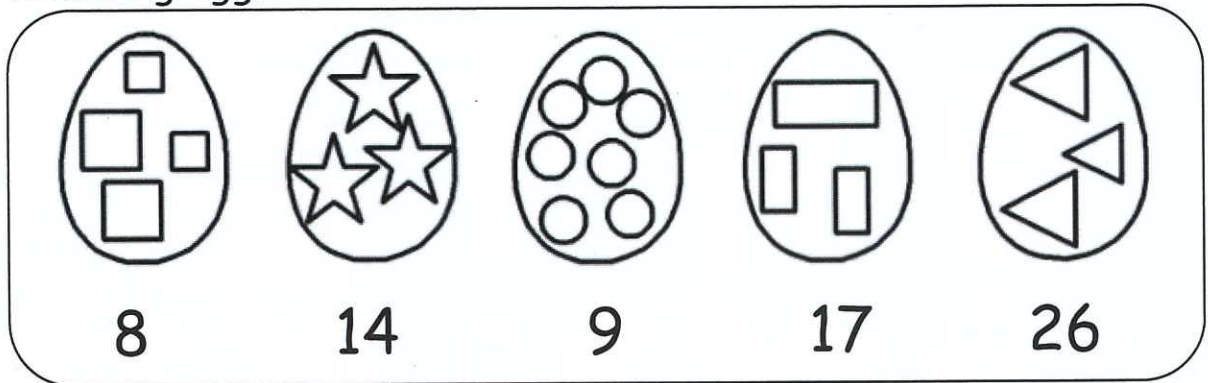


# 16. Easter Egg Hunt (2)




Date:	_____
Score:	_____ / 6
1D11 - Addition of 3 numbers	




Little Bunny joined the Easter egg hunt competition and found the following eggs.






Fill in the blanks.

\* Suggest students to write all the numbers below the eggs first, then do the addition.

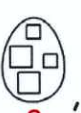


1.) He found ( 31 )  ,  and  altogether.

2.) He found ( 52 )  ,  and  altogether.

3.) He found ( 40 )  ,  and  altogether.

4.) He found ( 48 )  ,  and  altogether.

5.) He found ( 57 )  ,  and  altogether.

6.) He found ( 51 )  ,  and  altogether.

