

## 9 2-D Shapes (2)

**Blacken the circle next to the correct answer.**

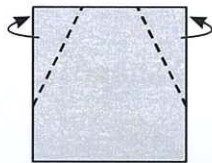
1. Yan has 5 geo-strips only, which of the following 2-D shape **cannot** be formed?

- A. A pentagon                       B. A quadrilateral  
 C. A triangle                          D. A hexagon

**Look at the picture and answer the question.**

2. Follow the dotted lines to fold a craft paper backwards.

What 2-D shape can we get?

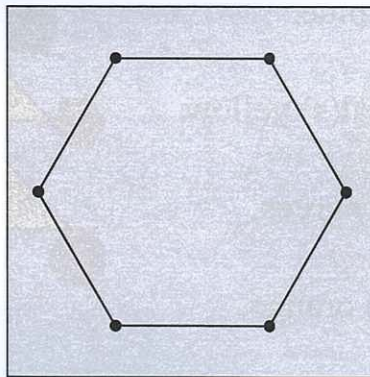


Fold  
backward →

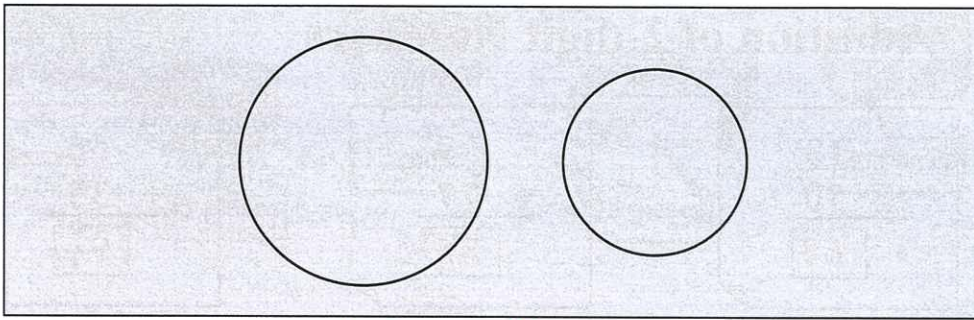
We can get a hexagon.

**Let's draw.**

3. Connect the points to draw a hexagon.



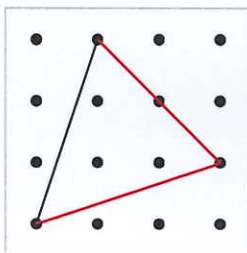
4. Use objects to outline a big circle on the left, then another smaller circle on the right.



Accept any reasonable answers.

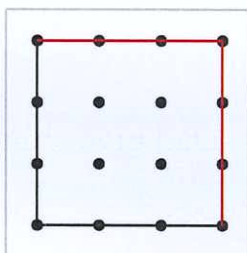
Follow the instructions to draw the required 2-D shapes on dotted paper.

5. A triangle



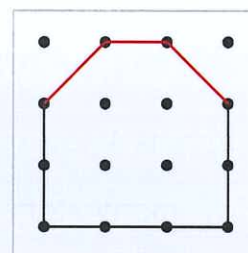
Accept any reasonable answers.

6. A quadrilateral



Accept any reasonable answers.

7. A hexagon



Accept any reasonable answers.

▲ The figure on the right is formed by a tangram. Write the given numbers of the pieces on the figure.

8.

