

15. Buying Toys (2)

Date: _____

Score: _____ / 6


















1D10 - Addition of 2d numbers

Mrs Tang would like to buy birthday gift for her twins. Please help her calculate how much she should pay if she chooses the following toys.



Fill in the blanks.

* Suggest students to write all the numbers below the icons first, then give the sum of each pair.

- 1.) She chooses a  **35** and a  **23**; she pays \$(**58**). 
- 2.) She chooses a  **48** and a  **49**; she pays \$(**97**). 
- 3.) She chooses a  **27** and a  **23**; she pays \$(**50**). 
- 4.) She chooses a  **54** and a  **27**; she pays \$(**81**). 
- 5.) She chooses a  **48** and a  **38**; she pays \$(**86**). 
- 6.) She chooses a  **17** and a  **27**; she pays \$(**44**). 