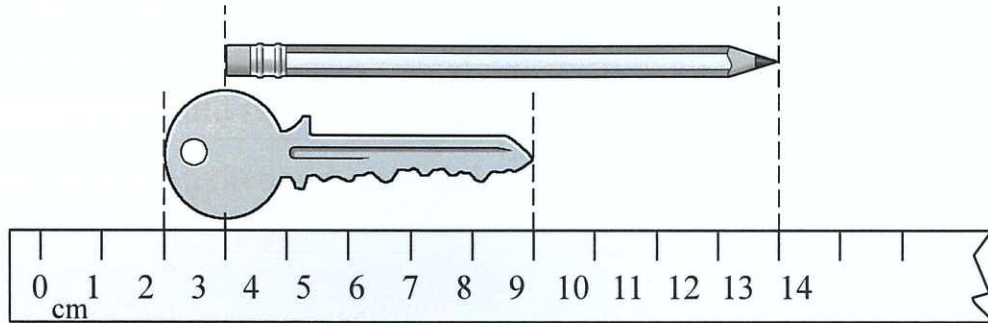










14 Centimetre and Centimetre Ruler

Look at the picture and answer the questions.



1.  is 9 cm long.
 2.  is 6 cm long.
 3.  is 3 cm (longer / shorter) than .
- (Circle the answer)

Measure and compare the length of the ribbons.

4.  is about 5 cm long.
 -  is about 7 cm long.
 -  is about 2 cm (longer / shorter) than .
- (Circle the answer)