









16 Hong Kong Coins

Let's count and fill in the blanks.



1.  is 10 - cent coin. There is/are 4  above.
2.  is 1 - dollar coin. There is/are 3  above.
3.  is 50 - cent coin. There is/are 1  above.
4.  is 10 - cent coin. There is/are 3  above.

Fill in the blanks.

5. There are 7 values of Hong Kong coins. The coin with the greatest value is 10-dollar coin and the smallest value is 10-cent coin.
6. Mimi has two wavy coins of different values. They are a 2-dollar coin and a 20-cent coin.
7. Jacky has two coins of the same shape and are silvery only. They are a 5-dollar coin and a 1-dollar coin.

Count and write the total values.

8.



6 dollars and 50 cents

9.



5 dollars and 90 cents

10.



9 dollars and 70 cents

11.



8 dollars and 30 cents

The table below shows Peter's savings.

Monday	Tuesday	Wednesday	Thursday	Friday

12. Peter's savings on Tuesday is 5 dollars and 40 cents.

13. The savings on Friday is 6 dollars and 20 cents.

14. There is no savings on Thursday.