

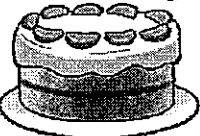







## Yummy Bakery

The number in    shows the quantity of food on the shelf.

 95 pieces	 28 pieces	 6 pieces
 16 pieces	 47 pieces	


Solve the following problems.





12. After selling 20 , the shopkeeper put the remaining  in a box. How many  are there in the box?

$$\underline{\hspace{2cm}}$$



$$= \underline{\hspace{2cm}}$$


There are         in the box.




13. There are         and        . How many more  are there than  ?

$$\square \circ \square = \square$$

There are        more  than .



14. There are 47 . 20 of them are chocolate flavour, the rest are original flavour. How many pieces of original flavour are there?

$$\underline{\hspace{2cm}}$$

$$= \underline{\hspace{2cm}}$$

There are        pieces of original flavour.

