

9 2-D Shapes (2)


Blacken the circle next to the correct answer.

① Which group of geo-strips below can make a pentagon?


A.




B.



C.




D.



Look at the picture and answer the question.

② Fold the craft paper along the dotted lines as shown. What 2-D shape can we get?

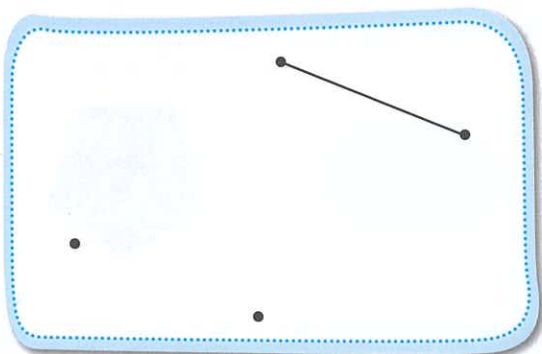


?

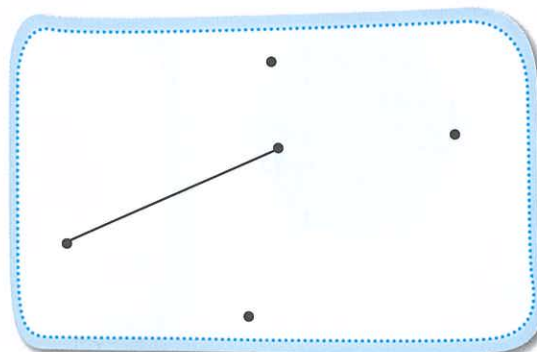
We can get a _____.

Connect the points to complete the required 2-D shapes.

③ Quadrilateral

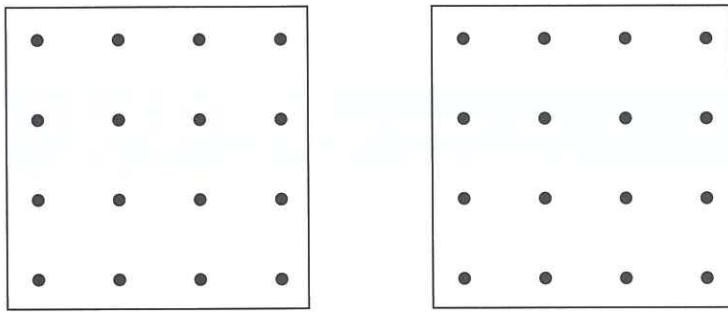


④ Pentagon



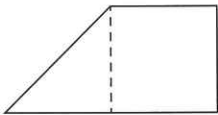
Follow the instructions and answer the questions.

- ⑤ Draw 2 different triangles on the dotted paper below.

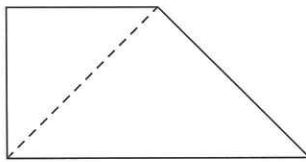


- ⑥ Take out the tangram stickers from Sticker Page 2. Use the stickers to form the required quadrilateral and paste the result below.

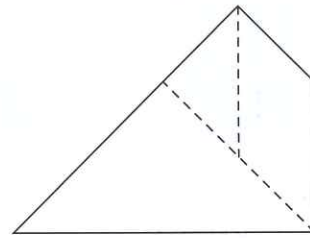
a)



b)

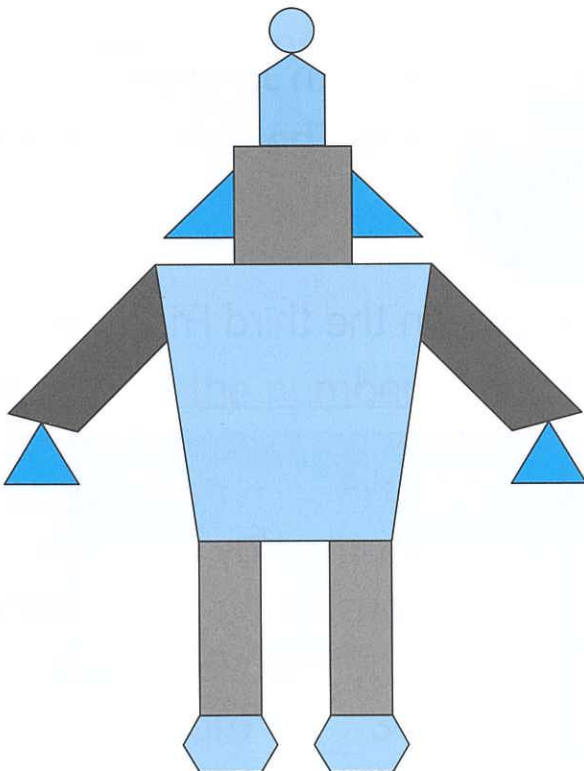


c)



Count the number of each type of 2-D shapes below.

⑦



circle(s)
 triangle(s)
 quadrilateral(s)
 pentagon(s)
 hexagon(s)