

9 2-D Shapes (2)

Blacken the circle next to the correct answer.

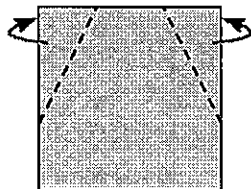
1. Yan has 5 geo-strips only, which of the following 2-D shape **cannot** be formed?

- A. A pentagon B. A quadrilateral
 C. A triangle D. A hexagon

Look at the picture and answer the question.

2. Follow the dotted lines to fold a craft paper backwards.

What 2-D shape can we get?

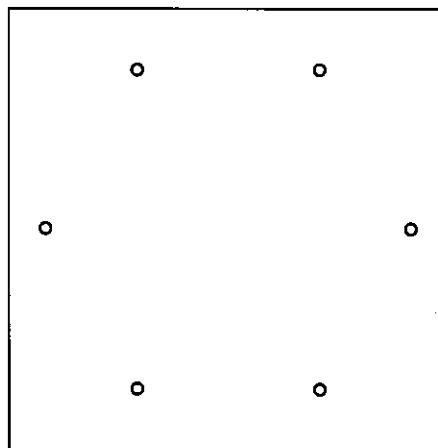


Fold
backward


We can get a _____.

Let's draw.

3. Connect the points to draw a hexagon.

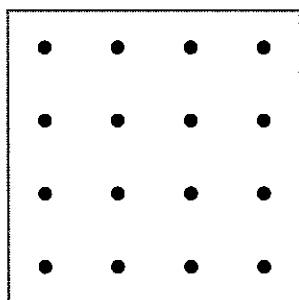


4. Use objects to outline a big circle on the left, then another smaller circle on the right.

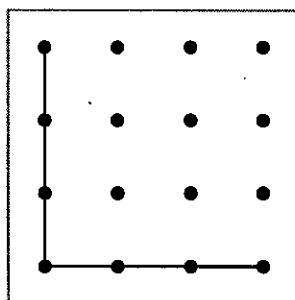


Follow the instructions to draw the required 2-D shapes on dotted paper.

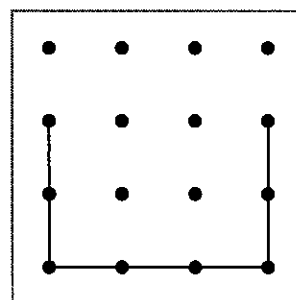
5. A triangle



6. A quadrilateral



7. A hexagon



The figure on the right is formed by a tangram. Write the given numbers of the pieces on the figure.

- 8.

