









16 Hong Kong Coins

Let's count and fill in the blanks.



1.  is _____ - dollar coin. There is/are _____  above.
2.  is _____ - dollar coin. There is/are _____  above.
3.  is _____ - cent coin. There is/are _____  above.
4.  is _____ - cent coin. There is/are _____  above.

Fill in the blanks.

5. There are _____ values of Hong Kong coins. The coin with the greatest value is _____ coin and the smallest value is _____ coin.
6. Mimi has two wavy coins of different values. They are a _____ coin and a _____ coin.
7. Jacky has two coins of the same shape and are silvery only. They are a _____ coin and a _____ coin.

Count and write the total values.

8.



_____ dollars and _____ cents

9.



_____ dollars and _____ cents

10.



_____ dollars and _____ cents

11.



_____ dollars and _____ cents

The table below shows Peter's savings.

Monday	Tuesday	Wednesday	Thursday	Friday

12. Peter's savings on Tuesday is _____ dollars and _____ cents.

13. The savings on _____ is 6 dollars and 20 cents.

14. There is no savings on _____.