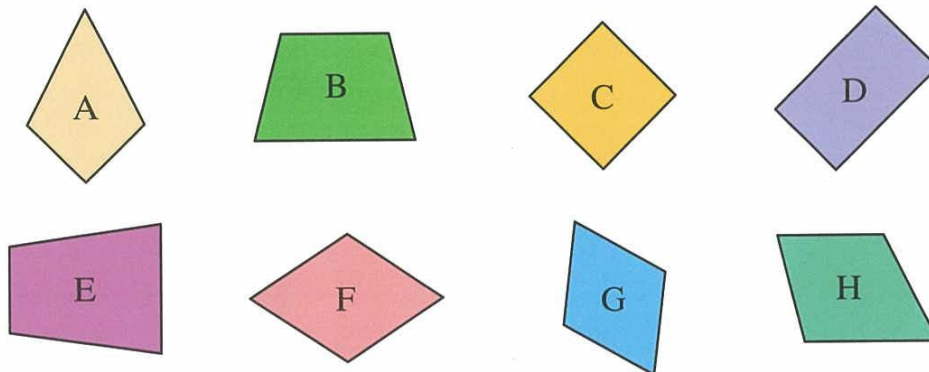


4

Rhombuses and trapeziums

1. Follow the instructions. Write down the letter(s) for the answer(s).



List:

(a) Square(s): C


(b) Rhombus(es): F, G

(c) Trapezium(s): B, E, H


2. Name the following 2-D shapes.



(a) Answer: Square




(b) Answer: Trapezium



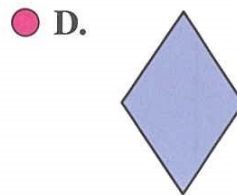

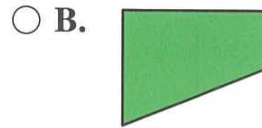
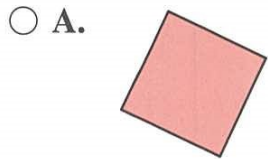
(c) Answer: Rhombus




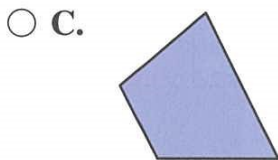
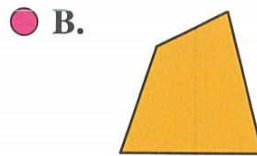
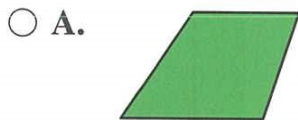
(d) Answer: Rectangle



3. Which figure is a rhombus?



4. Which figure is NOT a trapezium?



5. Name the 2-D shapes that make up the diagram below.

