

7


Making quadrilaterals

Marks : _____


Date : _____

Use a ruler to draw quadrilaterals in the space provided. Fill the quadrilaterals with different colours. (The answers are for reference only. Accept any reasonable answers.)

1. a rhombus

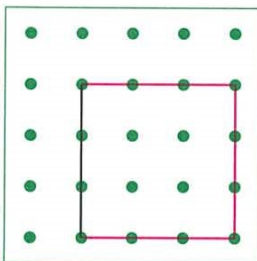


2. a rectangle

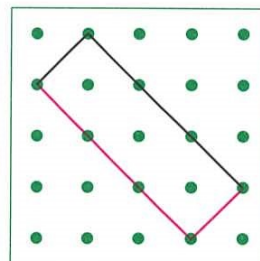


TSA Add straight lines on the pin-boards below to form the quadrilaterals required.

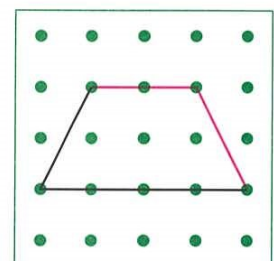
3. a square



4. a rectangle

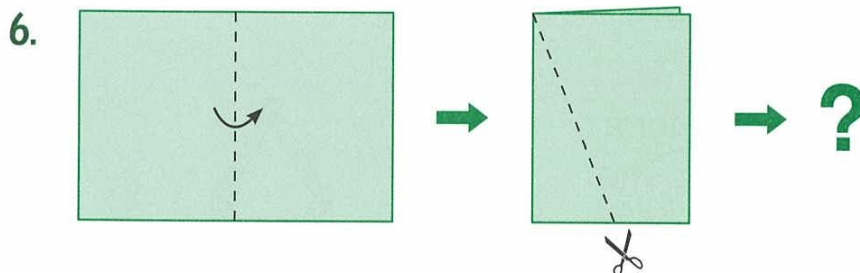


5. a trapezium



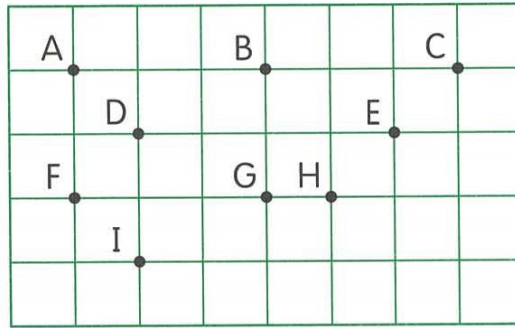
(The answer is for reference only.
Accept any reasonable answers.)

Fill in the blanks.



Fold a piece of rectangular paper along the dotted line. Then cut along the dotted line as shown in the figure above. Unfolded the paper and you will get 1 triangle and 2 trapeziums.

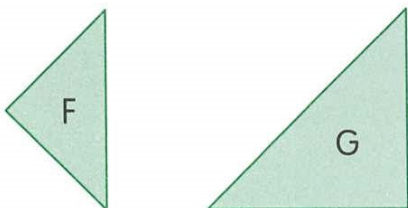
TSA 7.



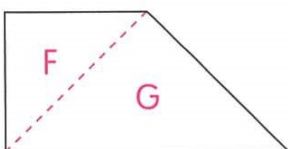
- (a) Chris wants to form a rectangle on the pin-board above using a rubber band. He should choose points A , B , G and F .
- (b) Then he wants to form a rhombus using a rubber band. He should choose points B , E , G and D .
- (c) Lastly, he wants to form a trapezium using a rubber band. He should choose points A , C , H and F . (The answer is for reference only. Accept any reasonable answers.)

Cut out the tangram shapes in Appendix on P.28. Use them to make the trapeziums below. Draw dotted lines and write the letters in each figure to show how you use the shapes.

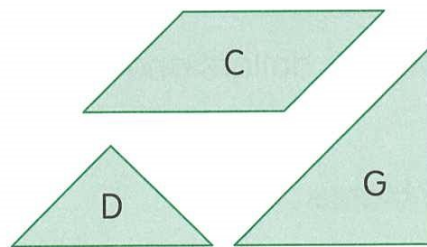
8.



Use tangram shapes F and G



9.



Use tangram shapes C, D and G

