

10

Hong Kong notes and coins

Write the value of each note. (Questions 1–4)



100 dollars



500 dollars



20 dollars



1000 dollars

5. Write down the amounts shown:



290 dollars 0 / blank cents




815 dollars 10 cents



1120 dollars 40 cents


Date:

Marks:




6.  can be exchanged for 10 .

7.  can be exchanged for 10 .

8.  can be exchanged for 10 .



9.  can be exchanged for 5 .

10.  can be exchanged for 5 .

11. 1  and 3  can be exchanged for 32 .

12. 2  and 5  can be exchanged for

6 .

13. 40  can be exchanged for 4 .