

11

Addition and subtraction of dollars and cents

Read the price tag and write the price. (Questions 1–2)

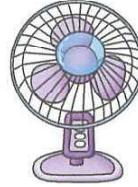
1.



\$89.00

89 dollars

2.



\$274.50

274 dollars and 50 cents

3. The price of a rice cooker is five hundred and forty-two dollars. Write the price in numerals on the price tag.



\$ 542.00

542.0, 542 are acceptable

4.





\$134.90

Circle the amount needed to buy the teddy bear.



Date: Marks:

5. Kelvin buys  \$14.80 and  \$9.50.

How much should he pay?

Answer: He should pay 24 dollars and
30 cents.


	\$	¢
	14	80
+	9	50
	24	30

6. Janet buys  \$39.90 and  \$26.00.

How much should she pay?


Answer: She should pay 65 dollars and
90 cents.

	\$	¢
	39	90
+	26	00
	65	90

7. If Simon pays 50 dollars for  \$37.50,
- how much change should he get?

Answer: He should get 12 dollars and
50 cents change.

	\$	¢
	50	00
-	37	50
	12	50

8. If Amy pays 100 dollars for  \$61.30,
- how much change should she get?

Answer: She should get 38 dollars and
70 cents change.

	\$	¢
	100	00
-	61	30
	38	70