


Date:


Marks:

Read the question and circle the objects in groups. Then write the correct number in each . (Questions 5–9)


5. Put 10 apples into groups of 5. There are groups.



6. Put 16 books into groups of 2. There are groups.



7. Put 20 bananas into groups of 3. There are groups. bananas are left over.



8. Put 21 pencils into groups of 4. There are groups. pencil is left over.



9. Put 18 footballs into groups of 5. There are groups. footballs are left over.

