







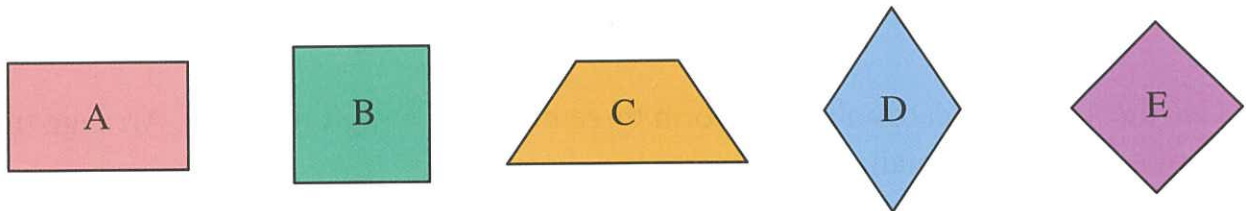


Match the shapes with their names. (Questions 1–4)

1.   Circle
2.   Triangle
3.   Four-sided shape
4.   Five-sided shape


5. Follow the instruction. Write down the letter(s) for the answer.



List all the square(s): B, E

**Analysis (Q5)**  
The four sides of a square are equal in length, and the four angles are right angles.

6. Follow the instruction. Write down the letter(s) for the answer.




List all the rectangle(s): A, D

**Analysis (Q6)**  
The opposite sides of a rectangle are equal in length, and the four angles are right angles.


Date: Marks: 

7. Which figure is a square?


A.



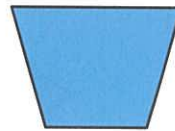
B.



C.



D.




8. Which figure is a rectangle?

A.



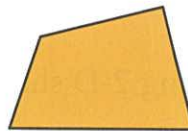
B.



C.



D.



Put a ✓ in the correct box. (Questions 9–10)

(There may be more than one answer for each question.)

		Four sides are equal in length	Only opposite sides are equal in length	Four angles are right angles
9.	Square	✓		✓
10.	Rectangle		✓	✓