


Score:

/6


Division (2): How many there?

- 1.) How many '2's are there in 8? Circle the groups of 2 squares and count the number of circles.




There are () '2's in **8**.

- 2.) How many '3's are there in 12? Circle the groups of 3 triangles and count the number of circles.



There are () '3's in **12**.


- 3.) 24 slices of watermelons are put into bags of 4. Circle the slices in groups of 4.



How many '4's are there
in **24**?

There are () '4's in **24**.


4.) 25 pencils are put into boxes of 5. Circle the pencils in groups of 5.



How many '5's are there
in **25**?

There are () '5's
in **25**.


5.) 18 toy bears are packed into boxes of 6. Circle the toy bears in groups of 6.



How many '6's are there
in **18**?

There are () '6's
in **18**.

6.) 21 goldfish are put into tanks of 7. Circle the goldfish in groups of 7.



How many '7's are there
in **21**?

There are () '7's
in **21**.