

Making Cupcakes

We make different types of cupcakes for our party. Study the information below about the cupcakes.




Plain

With cream top



Plain with cherry



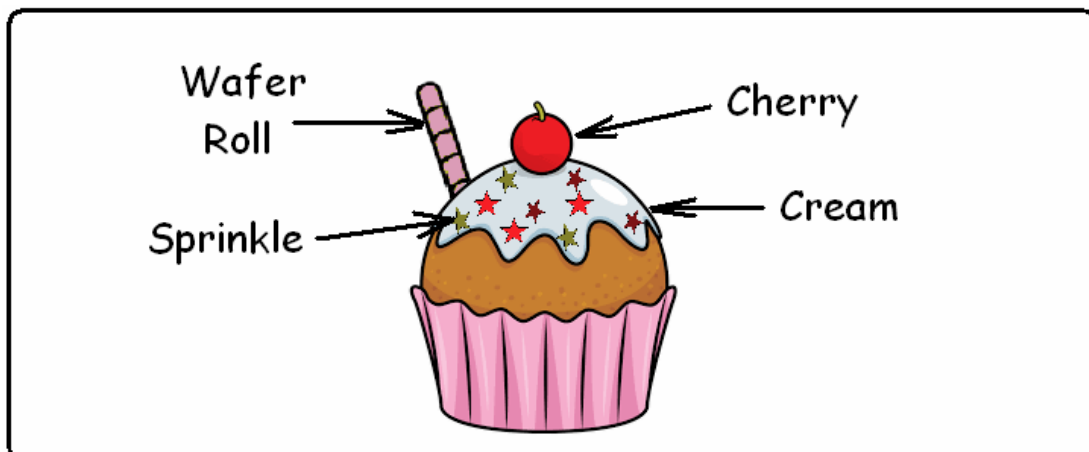
With cream top and cherry



With cream, cherry and wafer roll



With cherry and wafer roll




Date: _____

Score: _____ / 6

1B11 - Subtraction within 18

9. Cupcakes Party (1)

We make 6 types of cupcakes for the X'mas party. The number below each figure shows the amount of each type.



A lot of cupcakes are eaten in the party. Let's see how many cupcakes are left.

1.) 3  are eaten. We have ()  left.

2.) 2  are eaten. We have ()  left.

3.) 5  are eaten. We have ()  left.

4.) 4  are eaten. We have ()  left.

5.) 6  are eaten. We have ()  left.

6.) 4  are eaten.

We have ()  left.




10. Cupcakes Party (2)

Date: _____

Score: _____ / 6

1B11 - Subtraction within 18

We buy 6 types of cupcakes for the birthday party. The number below each figure shows the amount of each type.



A lot of cupcakes are eaten in the party. Let's see how many cupcakes are left.

1.) 7  are eaten. We have ()  left.

2.) 8  are eaten. We have ()  left.

3.) 9  are eaten. We have ()  left.

4.) 8  are eaten. We have ()  left.

5.) 4  are eaten. We have ()  left.

6.) 6  are eaten.

We have ()  left.

