


17 The Use of Coins

Blacken the circle next to the correct answer.

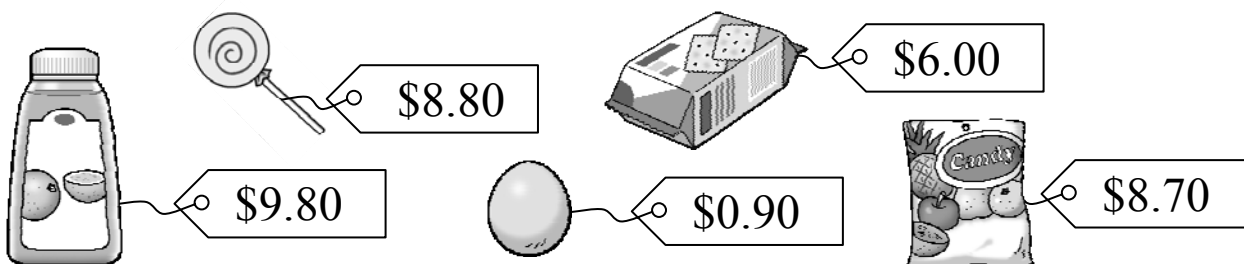
1. Which of the following can 1  be exchanged for?





2. Which of the following can 1  be exchanged for?
(There can be more than one answer.)




Look at the pictures and answer the questions.



3. The price of a  is _____.

4. The price of a  is _____.

5. The price of an  is _____.

Follow the instruction and circle the answer.

6.



Kevin buys a bottle drink and pays the following coins:



Circle his bottle drink in the picture above.

Circle the coins needed to pay the amount.

7.



8.



9.

